

SUNSHINE MATH - 1
 Venus, XIII

Name: _____
 (This shows my own thinking.)


★★★ 1. Use the chart. Find the value of each word.

A → 1¢	B → 2¢	C → 3¢	D → 4¢	E → 5¢	F → 6¢
G → 7¢	H → 8¢	I → 9¢	J → 10¢	K → 11¢	L → 12¢
M → 13¢	N → 14¢	O → 15¢	P → 16¢	Q → 17¢	R → 18¢
S → 19¢	T → 20¢	U → 21¢	V → 22¢	W → 23¢	X → 24¢
Y → 25¢	Z → 26¢				

BALL = 2¢ + 1¢ + 12¢ + 12¢ = 27¢


ROPE = ___ QUILT = ___ Your first name = _____

★★★ 2.

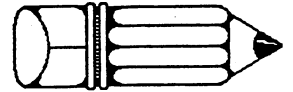



- A. How many stars are there in the triangle? ___ stars
- B. How many stars are in the circle? ___ stars
- C. How many stars are in the rectangle? ___ stars

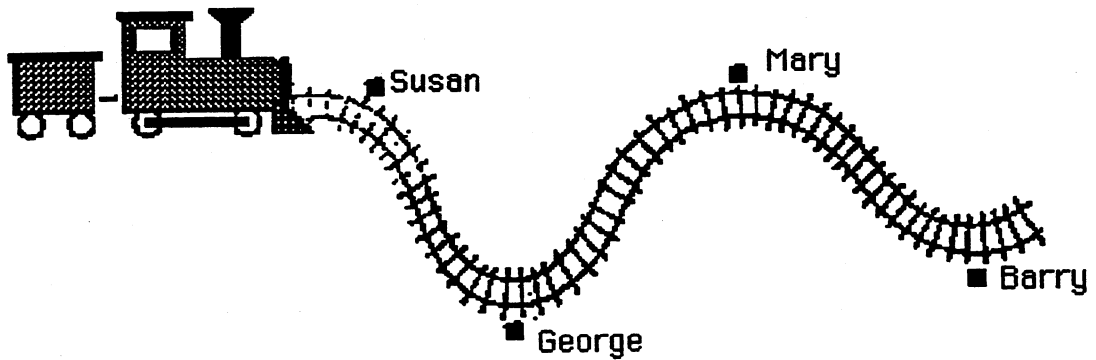
★ 3. Circle the animal that weighs more.



- ★★ 4. Two pictures below can be folded so that the two halves match. The other picture can't be folded to match. Color the two that can be folded to match.



- ★★ 5. Jan has a toy train. She placed George's house 2 meters from Susan's house. Estimate how far it is from George's house to Barry's house. Circle the answer.



A. 8 meters

B. 6 meters

C. 4 meters

- ★★★★ 6. Ramon stops by his Gramma's house each day on his way to school. He has 2 ways to walk to his Gramma's house. He has 3 ways to walk from there to school. How many ways can he travel from his house to school? _____ ways

