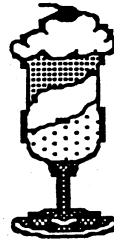


SUNSHINE MATH - 1
Venus, XIX

Name: _____
(This shows my own thinking.)


- ★ 1. How many dimes and how many pennies do you need to buy the ice cream sundae?

sundae	41¢
soda	36¢



Answer: _____ 's and _____ 's

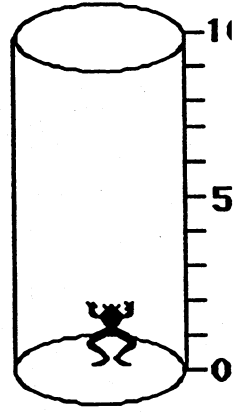
- ★★ 2. Amy bought 20 more rocks than shells. Which two bags did she buy? Circle the bags.



- ★★ 3. Jan tossed three beanbags.
Each beanbag landed on a different number.
Jan's score was 8.
What numbers did the beanbags land on?
Circle them.

1	3
2	4

★★★★ 4. A frog fell in a 10-foot deep hole. The frog jumps up 3 feet, but falls back 1 foot while resting for the next jump. How many jumps does it take the frog to get out of the hole? Draw a picture of the frog's trip, to help you.

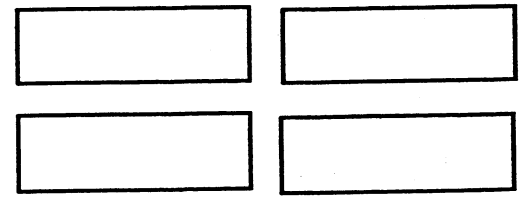


Answer: The frog got out in _____ jumps.

★★★ 5. Write the numbers and the number sentences. The first is done for you.

	Shapes in All:	Remove:	Number Left:	Number Sentence:
	9	all ▲'s	7	$9 - 2 = 7$
	_____	all ●'s	_____	_____
	_____	all ■'s	_____	_____
	_____	all ■'s and all ●'s	_____	_____

★ 6. Draw 5 X's in each box.



Draw 4 extra X's not in any box.
How many X's in all?

Answer: _____ X's