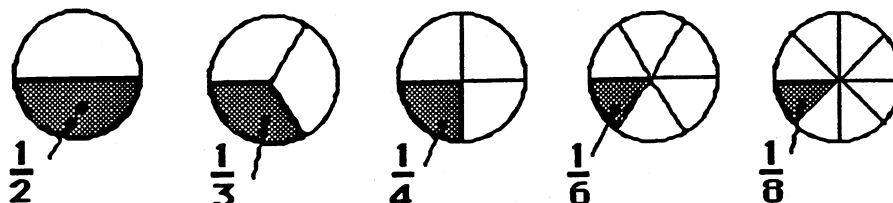


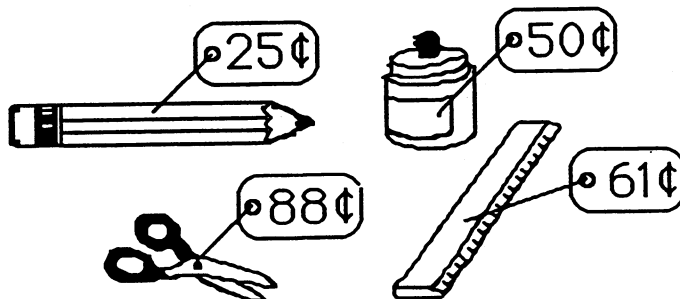
★ 1. Which piece of pie is the biggest? Write the fraction.



Answer: _____

★★ 2. Use the tax chart to find the tax for each item, and then write the total cost of each of the items below.

| Tax Chart | |
|-----------------|-----|
| Cost of an item | Tax |
| From 1¢ to 20¢ | 1¢ |
| From 21¢ to 40¢ | 2¢ |
| From 41¢ to 60¢ | 3¢ |
| From 61¢ to 80¢ | 4¢ |
| From 81¢ to \$1 | 5¢ |




Answer: A pencil costs _____. Paste costs _____.

Scissors cost _____. A ruler costs _____.

★★ 3. Mary had \$5.00. She bought bread for \$1.00 and a candy bar for \$1.00. How much change should she get from the store clerk?

Answer: _____


★★★★ 4. How many ways are there for 5 mice to live in two houses? Hint! Finish the chart.



The illustration shows five mice. To their right is a rectangular chart with a rounded top. At the top left of the chart is a house icon, and at the top right is another house icon. Below the first house icon are the numbers 0 and 1. Below the second house icon are the numbers 5 and 4.

Answer: There are _____ ways.

★★ 5. Help Fred Frog hop back across the pond. Fill in the missing number on the lily pad.



★★ 6. Wayne had to pick up a marble without looking. Which one did he probably get, black or white?

Answer: He probably got a _____ marble.

