
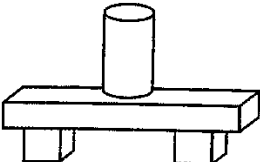
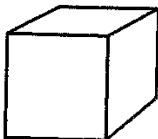

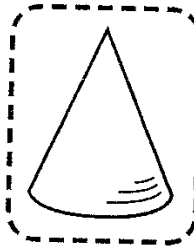


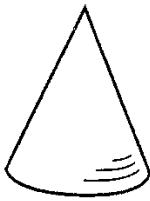




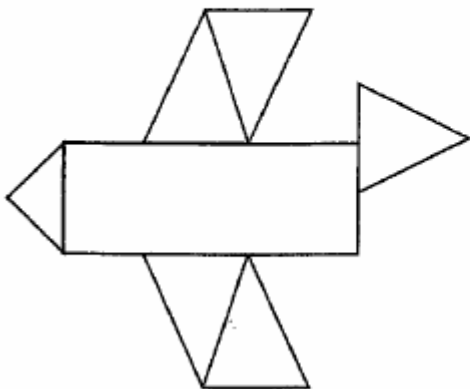
\* 1. Circle the figure that is missing from Model B.

Model A	Model B			
				
				

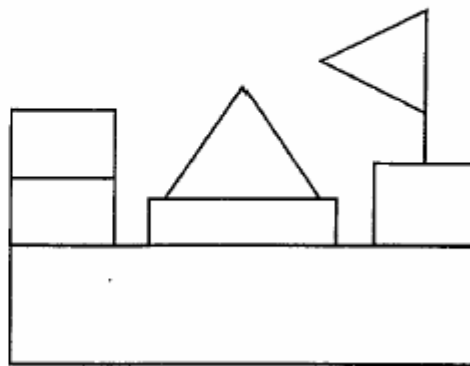
\*\* 2.

Color each	□	red	▶	Color each	○	blue	▶
Color each	△	green	▶	Color each	□	yellow	▶

1.



2.



\*\*\* 3. Complete each table.


1.

Subtract 1.	
9	8
7	
10	
6	

2.

Subtract 2.	
8	
11	
6	
4	

\*\* 4. Subtract. Then write two addition facts. (Ignore the 2 next to the figure)



\*\*\* 5. Use a calendar to answer the following:

1. I am the first month of the year. What month am I?

---

---

---

2. I am the month that comes after November.

---

---

---

3. I am the third month of the year.

---

---

---

4. I am the month that comes after June.

---

---

---

5. I am your birthday month.

---

---

---