







***** 1. Go Shopping. Use coins to solve the following.

You have these coins.	You want to buy these things.	Use the fewest coins to show the money you need. Draw the coins.
		
		
		

**** 2. Complete each table.

Subtract 3.	
5	
9	
3	
12	

4.

Subtract 1.	
8	
5	
11	
12	

***** 3.

Find the dates of the birthdays.
Use the calendar to answer the questions.



Sunday	Monday	Tuesday	Wednesday	Thursday	Friday	Saturday
	1 Leon	2	3	4	5	6
7	8	9	10 Sonia	11	12	13
14	15	16	17	18	19	20
21	22 Maria	23	24	25	26	27 Gary
28	29	30 Kay				

1. What is the date of Kay's birthday? _____
2. What is the date of Gary's birthday? _____
3. What is the date of Maria's birthday? _____
4. Who has a birthday 9 days after Leon? _____

