

***** 1.

Mack has one coin that equals 25¢.
Circle the coin.



Now he has 3 coins that equal 25¢. Circle the coins.



Now Mack has 4 coins that make 25¢. Circle the coins.



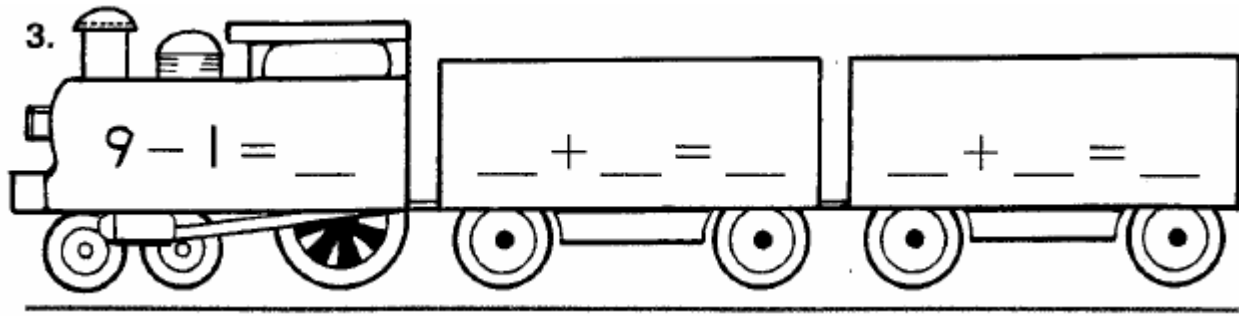
Now he has 5 coins that make 25¢. Circle the coins.



Now he has 7 coins that make 25¢. Circle the coins.



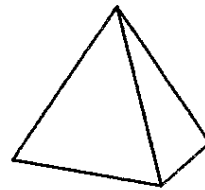
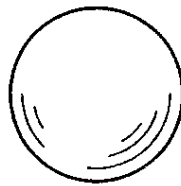
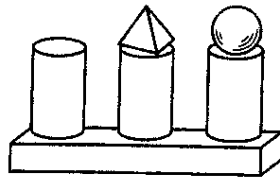
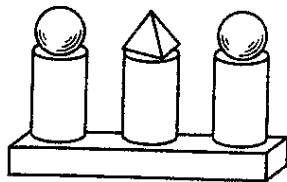
*** 2. Subtract. Then write the two addition facts. (Ignore the 3 in the picture).











* 3 Circle the figure that is missing from model B.

Model A

Model B



**** 4.

Color each 	 red	Color each 	 blue
Color each 	 green	Color each 	 yellow

