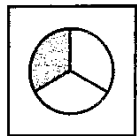
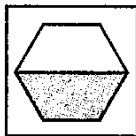
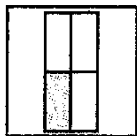
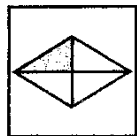


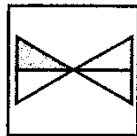
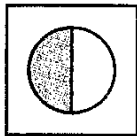
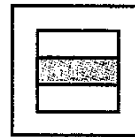
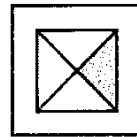
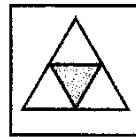
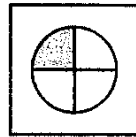
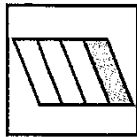
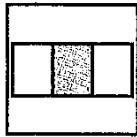

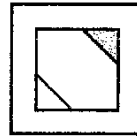

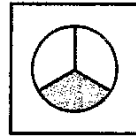


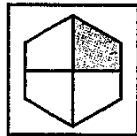
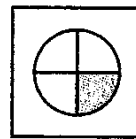
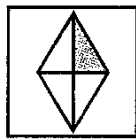
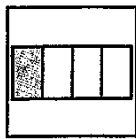

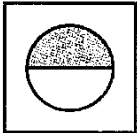



***** 1. Fourths.

Find the figures that show fourths.
Then join those figures to make a path
home from school.


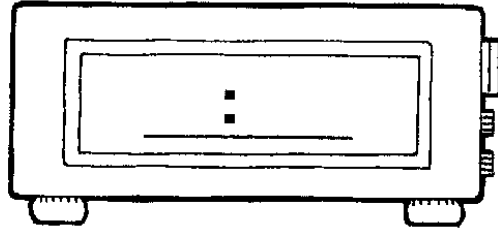
The illustration shows a school building with a flagpole flying the American flag. A school bus is parked in front. To the right is a playground with a slide and a tower. A dashed line starts from the school and points towards a house in the background. The house has a chimney and a porch. A path of stepping stones leads from the house towards the school. There are trees, a fence, and flowers around the house.



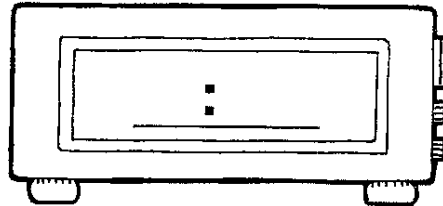
** 2. Look at the clock. Write the time that will be 30 minutes later.




Thirty minutes later



Thirty minutes later



*** 3. Write the missing numbers.



**** 4. Abe has 11 cents. He buys three things. Circle the three things he buys.

